

Quiz Date: 26th August 2020

Q1. Ramesh goes 10m to south from point A, then take his left turn and goes 18m, then again, he takes his left turn and goes 20m and after that, he takes one more left turn and goes 25m before taking his right and finally, goes 2m to reach point B. Find the direction of Point A with respect to Point B?

- (a) North-west
- (b) South
- (c) South-east
- (d) North-east
- (e) None of these

Direction (2-4): Study the following information carefully and answer the questions given below:

Point A is in East of B which is in South of C. D is in North of E which is in North-west of F. G is in East of C which is in North of H. F is in West of H. E is in West of B. D is in West of G which is in North-east of A.

Q2. Point A is in which direction with respect to point H?

- (a) East
- (b) West
- (c) North-east
- (d) South-west
- (e) None of these

Q3. Point F is in which direction with respect to point B?

- (a) North-east
- (b) West
- (c) East
- (d) South-west
- (e) None of these

Q4. Point E is in which direction with respect to point A?

- (a) North-east
- (b) West
- (c) East
- (d) South-west
- (e) None of these

Direction (5-7): Study the following information carefully and answer the questions given below:

Point V is in 16m north of Point U. Point P is in 14m east of Point V. Point T is in 8m south of Point P. Point S is in 16m east of Point T. Point Q is in 25m north of Point S. Point R is in 30m west of Point Q.

Q5. What is the position of Point P with respect to Point R?

- (a) North- east
- (b) South - west
- (c) South - east
- (d) North
- (e) North-west

Q6. What is the total distance covered from Point P to Point Q?

- (a) 40m
- (b) 49m
- (c) 29m
- (d) 24m
- (e) None of these

Q7. What is total distance covered by point P and point S also point P is in which direction with respect to Point S?

- (a) 24m, North-west
- (b) 32m, South-east
- (c) 24m, North-east
- (d) 30m, South
- (e) None of these

BANKERS

Direction (8-10): Study the following information carefully and answer the questions given below:

A fighter jet Miraj flying for airstrike on five targets from Point XX. It flies 12km in east from XX to reach XC. After that it takes right turn and flies 16km to reach point XB. Now, it takes left turn and flies 23km to reach point XD. After that, it takes another left turn and flies 8km to reach point XR. Now, it takes right turn and flies 12km to reach final point XT.

Q8. What is the position of Point XC with respect to Point XR?

- (a) South-east
- (b) North-west
- (c) South-west
- (d) North
- (e) None of these

Q9. What is the shortest distance between Point XX and Point XB?

- (a) 20km
- (b) 24km
- (c) 30km
- (d) 32km
- (e) None of these

Q10. If the fighter plane goes 8km in north from Point XR and reach to Point XY, then what is the distance between XY and XX?

- (a) 23km
- (b) 31km
- (c) 35km
- (d) 33km
- (e) None of these

Direction (11-12): Study the following information carefully and answer the questions given below:

Point A is in 200m east from Point B. Point C is in 350m south from Point B. Point D is in 200m west from Point C. Point E is in 170m north from Point D. Point F is in 350m north from Point G. Point E is in 180m east from Point F.

Q11. What is the total distance between Point C and Point E?

- (a) 350m
- (b) 370m
- (c) 380m
- (d) 340m
- (e) 300m

Q12. What is the direction of Point B with respect to Point D?

- (a) North-east
- (b) South-west
- (c) South
- (d) North
- (e) None of these

Direction (13-15): Study the following information carefully and answer the questions given below:

Point G is in 5km north of Point E. Point B is in 8km east of Point G. Point C is in 8km west of Point H. Point B is in 14km north of Point H. Point D is in 6km west of Point F. Point A is in 5km north of Point D. Point E is in 12km east of Point A.

Q13. What is the total distance between Point A and Point B?

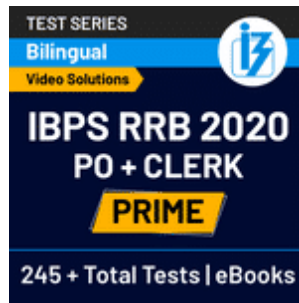
- (a) 22km
- (b) 2500m
- (c) 25km
- (d) 20km
- (e) None of these

Q14. What is the direction of Point D with respect to Point G?

- (a) South-west
- (b) South-east
- (c) North
- (d) South
- (e) North-west

Q15. What is the shortest distance between Point A and Point G?

- (a) 11km
- (b) 13km
- (c) 14km
- (d) 18km
- (e) None of these

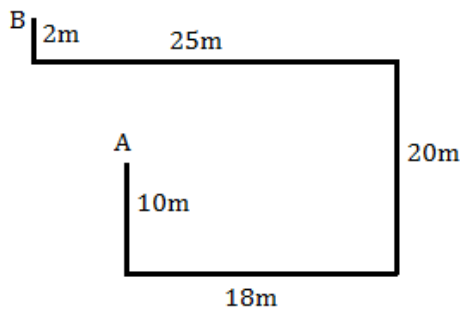


Solutions



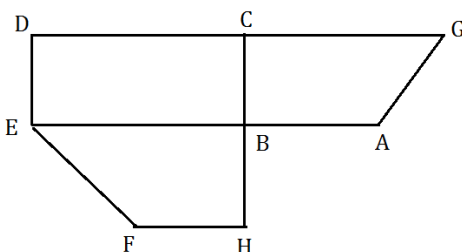
S1. Ans. (c)

Sol.



Solutions (2-4):

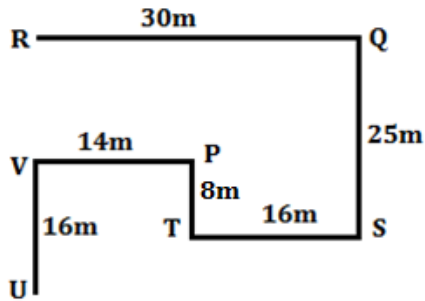
Sol.



- S2. Ans. (c)
- S3. Ans. (d)
- S4. Ans. (b)

Solutions (5-7):

Sol.




- S5. Ans. (c)
- S6. Ans. (b)
- S7. Ans. (a)

Solutions (8-10):


- S8. Ans. (b)

Sol.



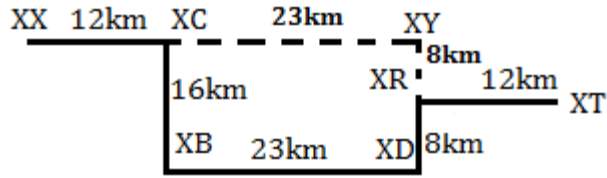
- S9. Ans. (a)

Sol.



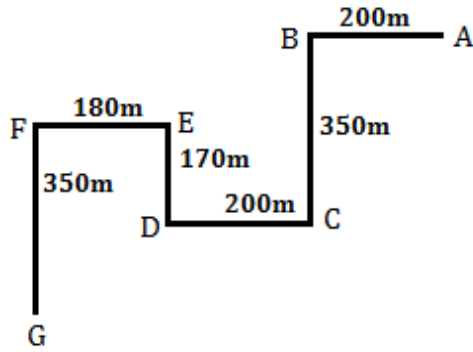
- S10. Ans. (c)

Sol.



Solutions (11-12):

Sol.



S11. Ans. (b)

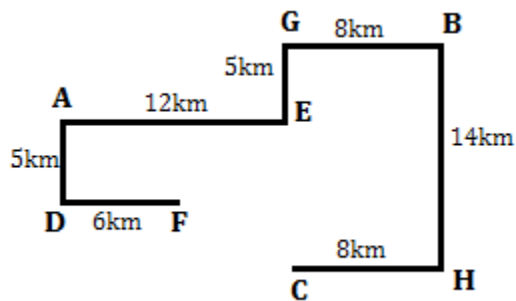
S12. Ans. (a)

Solutions (13-15):

S13, Ans. (c)

S14. Ans. (a)

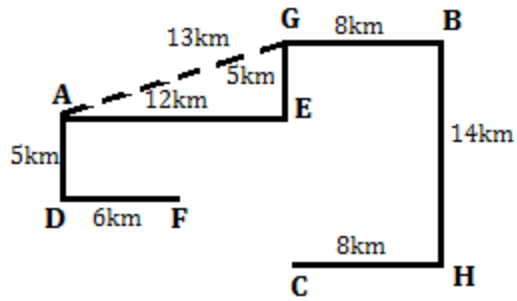
Sol.



S15. Ans. (b)

Sol.





For any Banking/Insurance exam Assistance, Give a Missed call @ 01141183264



BANKERS

adda247