

Quiz Date: 24th October 2020

Directions (1-5): Study the following information carefully to answer the given questions: There are six employees J, K, L, M, N, O of a company and all of them are working on six different designation of a company viz. CMD, MD, CEO, COO, SE, JE. All the designations given are to be considered in a given order (as CMD is considered as Senior-most and JE is considered as the Junior-most). They all likes different perfume brands scent. The one who is junior than only one person likes Versace. The one who likes Titan is senior than K. Only two persons are senior than J. O likes UCB and is junior than K. K does not like Versace. The one who is JE neither likes Gucci nor Axe. M does not like Versace and also is not SE. The one who likes Fogg is not JE. L is senior to the one who likes Fogg. N does not like Fogg and junior than L but senior than O. M is junior than the one who likes Gucci. The one who likes Axe is senior than the one who likes Titan. L is not junior than the one who likes Axe. The one who likes Fogg is just junior than M. J does not like Gucci.

Q1. Who among the following is COO of the company?

- (a) J
- (b) N
- (c) K
- (d) O
- (e) None of these

Q2. Who among the following likes Fogg?

- (a) The one who is CEO
- (b) The one who is CMD
- (c) M
- (d) The one who is SE
- (e) O

Q3. How many persons are junior than N?

- (a) Three
- (b) More than three
- (c) Two
- (d) One
- (e) None of these

Q4. Which of the following perfume MD likes?

- (a) UCB
- (b) Titan
- (c) Fogg
- (d) Versace
- (e) None of these

Q5. Who among the following is just junior than O?

- (a) K
- (b) D

- (c) B
- (d) J
- (e) No one

Directions (6-10): Each of the questions below consist of a question and two statements numbered I and II given below it. You have to decide whether the data provided in the statements are sufficient to answer the question. Read both the statements and give answer

- (a) if the data in statement I alone are sufficient to answer the question, while the data in statement II alone are not sufficient to answer the question.
- (b) if the data in both statement I and II together are not sufficient to answer the question.
- (c) if the data either in statement I alone or in statement II alone are sufficient to answer the question.
- (d) if the data in both statement I and II together are necessary to answer the question.
- (e) if the data in statement II alone are sufficient to answer the question, while the data in statement I alone are not sufficient to answer the question.

Q6. How many children are there between Meera and Neha in a row of children?

- I. Meera is 19th from the right in the row.
- II. Neha is fifteenth from the left in the row.

Q7. Who among P, Q, R, S and T is the heaviest?

- I. S is lighter than only two persons. Q and R are heavier than S.
- II. Q is heavier than P and T, Q lighter than R.

Q8. What is the code for 'Who wants Justice' in a certain code language?

- (I) In a certain code language 'ram wants water' is written as 'ma tn ew', 'Who is sarita' is written as 'sn tp hw'.
- (II) In a certain code language 'People wants Justice' is written as 'le tn ci', 'Who wants people' is written as 'tn le tp'

Q9. How many persons sit in the linear row?

- I. M is third from the right end of row. All of them facing north. D sits second to the left of M.
- II. No one sits to the left of G. Only eight persons sit between G and M.

Q10. In the question given below two conclusions followed by two statements. You have to choose the correct set of statements that logically satisfies the given conclusions

Conclusions:

- I. Some House are not Deal
- II. Some Flat are Bangle

Statements:

- I. Some Bangle are House. No deal is bangle. All House is Flat.
- II. All Flat are Bangle. All Bangle are House. No Flat is Deal.

Q11. Which alphabet is 3rd from the left in the meaningful four-letter word formed from the 1st, 2nd, 7th and 10th letter of the word PRODUCTION? If more than one word is formed, then mark answer as X and no meaningful word is formed then mark answer as Z.

- (a) P
- (b) Z
- (c) R
- (d) X
- (e) U

Q12. If all the vowels of the word 'VIOLENCE' are replaced by its succeeding letter according to the English alphabet and all the consonant are replaced with their previous letter according to the English alphabet and then all the letters are arranged in the alphabetical order the how many letter are there between the third letter from the left and third letter from the right in the English alphabetic series?

- (a) 5
- (b) 6
- (c) 2
- (d) 10
- (e) 4

Directions (13-15): Each of the following questions consists of a statement followed by two arguments I and II.

Give answer

- (a) if only argument I is strong
- (b) if only argument II is strong
- (c) if either I or II is strong
- (d) if neither I nor II is strong
- (e) if both I and II are strong.

Q13. Statement: Should the government open more medical colleges in the country?

Arguments: I. Yes. There is urgent need of qualified doctors and the ratio between doctors and the citizens is the lowest in India.

II. No. The Government should ensure quality education in the existing Medical Colleges as majority of the colleges lack necessary infrastructure.

Q14. Statement: Should India change its course from the economic reform process and look inward for all round economic development?

Arguments: I. No. There is no way to look backward after having started the process.

II. Yes. This will benefit India in the long run as the reform process borrowed from western countries will adversely affect our economy.

Q15. Statement: Should the admission to professional course in India be given only on merit without any concession to any particular group of students?

Arguments: I. Yes. This will improve the quality of the professionals as they will be able to complete the courses successfully.

II. No. This will keep a large number of socially and economically backward students out of the reach of the professional courses.



Solutions

Solutions (1-5):

Sol.

Designations	Persons	Perfumes
CMD	L	Gucci
MD	N	Versace
CEO	J	Axe
COO	M	Titan
SE	K	Fogg
JE	O	UCB

S1. Ans. (e)

S2. Ans. (d)

S3. Ans. (b)

S4. Ans. (d)

S5. Ans. (e)

Solutions (6-10):

S6. Ans(b)

The data in all the statements, I and II even together are not sufficient to answer the question.

S7. Ans(d)

Using together both the statements we can find the heaviest person.

$R > Q > S > P / T > T / P$

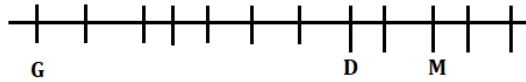
S8. Ans(e)

From statement II we can find the solution.

Word	Code
People	Le/tn
Wants	Le/tn
Justice	Ci
Who	Tp

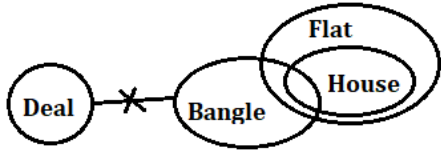
S9.Ans(d)

Using together both the statements we can find total number of persons.

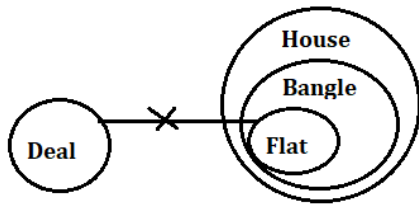


S10.Ans(c)

From statement -I,



From Statement-II,



S11. Ans.(b)

S12. Ans.(b)

Sol. Original Word- VIOLENCE

Obtained word- U J P K F M B F

After arrangement- B F F J K M P U

Solutions (13-15):

S13. Ans.(b)

Sol. Clearly, providing the existing Medical Colleges with modern and more sophisticated infrastructure can help them produce more and much learned doctors, as they can then cater to more students and provide quality education. So, only argument II holds strong while I does not.

Hence, the answer is (b).

S14. Ans.(d)

Sol. Clearly, any reform process may be changed, diverted or reversed at any stage, if it is to benefit the nation. Also, the idea of considering a process to be non-fruitful just because it has been borrowed from western countries, seems absurd. Thus, neither I nor II holds strong.

Hence, the answer is (d).

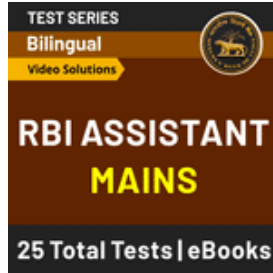
S15. Ans.(e)

Sol. Clearly, professional jobs require quality and merit and so the students having the required talent can turn out to be better professionals than those who join the course on



concession. So, argument I holds strong. However, it is these special concessions which make the professional courses affordable for certain talented students, belonging to socially and economically weaker sections, who otherwise would remain bereft of the same. So, argument II also holds strong.

Hence, the answer is (e).



For any Banking/Insurance exam Assistance, Give a Missed call @ 01141183264



BANKERS
adda247